


Compare Numbers (Comparing How Many More Quiz)

Quiz 1

1) How many more cubes does the first group have?




The answer is: _____

2) How many more cubes does the first group have?



The answer is: _____

3) How many more cubes does the first group have?




The answer is: _____

4) How many more cubes does the first group have?




The answer is: _____

5) How many more cubes does the first group have?




The answer is: _____

6) How many more cubes does the first group have?




The answer is: _____

7) How many more cubes does the first group have?



The answer is: _____

8) How many more cubes does the first group have?



The answer is: _____

9) How many more cubes does the first group have?



The answer is: _____

10) How many more cubes does the first group have?



The answer is: _____

a-quiz.com


Take This Quiz Online:



Compare Numbers (Comparing How Many More Quiz)


Quiz 2

1) How many more cubes does the first group have?



The answer is: _____

2) How many more cubes does the first group have?



The answer is: _____

3) How many more cubes does the first group have?




The answer is: _____

4) How many more cubes does the first group have?



The answer is: _____

5) How many more cubes does the first group have?



The answer is: _____

6) How many more cubes does the first group have?




The answer is: _____

7) How many more cubes does the first group have?



The answer is: _____

8) How many more cubes does the first group have?




The answer is: _____

9) How many more cubes does the first group have?



The answer is: _____

10) How many more cubes does the first group have?



The answer is: _____

a-quiz.com

Take This Quiz Online:



Compare Numbers (Comparing How Many More Quiz)

Quiz 3

1) How many more cubes does the first group have?



The answer is: _____

2) How many more cubes does the first group have?



The answer is: _____

3) How many more cubes does the first group have?




The answer is: _____

4) How many more cubes does the first group have?




The answer is: _____

5) How many more cubes does the first group have?




The answer is: _____

6) How many more cubes does the first group have?




The answer is: _____

7) How many more cubes does the first group have?



The answer is: _____

8) How many more cubes does the first group have?



The answer is: _____

9) How many more cubes does the first group have?



The answer is: _____

10) How many more cubes does the first group have?



The answer is: _____

a-quiz.com

Take This Quiz Online:



Compare Numbers (Comparing How Many More Quiz)


Quiz 4

1) How many more cubes does the first group have?




answer is: _____ The

2) How many more cubes does the first group have?




The answer is: _____

3) How many more cubes does the first group have?




The answer is: _____

4) How many more cubes does the first group have?




The answer is: _____

5) How many more cubes does the first group have?




The answer is: _____

6) How many more cubes does the first group have?



The answer is: _____

7) How many more cubes does the first group have?



The answer is: _____

8) How many more cubes does the first group have?




The answer is: _____

9) How many more cubes does the first group have?



The answer is: _____

10) How many more cubes does the first group have?



The answer is: _____

a-quiz.com

Take This Quiz Online:



Compare Numbers (Comparing How Many More Quiz)


Quiz 5

1) How many more cubes does the first group have?




The answer is: _____

2) How many more cubes does the first group have?



The answer is: _____

3) How many more cubes does the first group have?



The answer is: _____

4) How many more cubes does the first group have?



The answer is: _____

5) How many more cubes does the first group have?




The answer is: _____

6) How many more cubes does the first group have?




The answer is: _____

7) How many more cubes does the first group have?



The answer is: _____

8) How many more cubes does the first group have?



The answer is: _____

9) How many more cubes does the first group have?



The answer is: _____

10) How many more cubes does the first group have?



The answer is: _____

a-quiz.com

Take This Quiz Online:



Compare Numbers (Comparing How Many More Quiz)

Quiz 1 Answers:

- 1) 2
- 2) 6
- 3) 7
- 4) 8
- 5) 6
- 6) 2
- 7) 4
- 8) 2
- 9) 8
- 10) 2

Quiz 2 Answers:

- 1) 5
- 2) 4
- 3) 5
- 4) 7
- 5) 3
- 6) 6
- 7) 5
- 8) 5
- 9) 8
- 10) 5

Quiz 3 Answers:

- 1) 6
- 2) 7
- 3) 7
- 4) 5
- 5) 4

- 6) 6
- 7) 3
- 8) 4
- 9) 6
- 10) 5

Quiz 4 Answers:

- 1) 9
- 2) 5
- 3) 8
- 4) 6
- 5) 7
- 6) 7
- 7) 8
- 8) 3
- 9) 7
- 10) 9

Quiz 5 Answers:

- 1) 8
- 2) 3
- 3) 3
- 4) 6
- 5) 6
- 6) 5
- 7) 6
- 8) 7
- 9) 1
- 10)